


3

Fractions and Whole Numbers

Episode #314



Extension Activities

For more resources, visit:

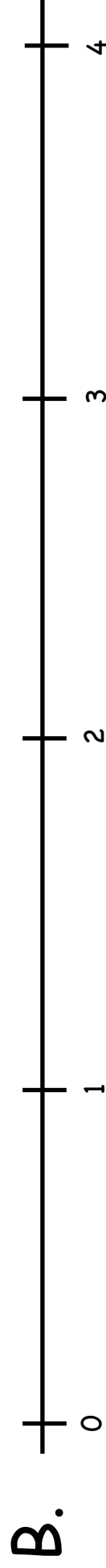
SIS  **TEACHERS**
Strategic Intervention Solutions

mathmights.org



Find the Fraction

Directions: Using the fractions from below locate where each fraction belongs on the number line and make tick marks to show where it belongs. Label the tick marks with the fraction. Cross off the fractions as you use them.

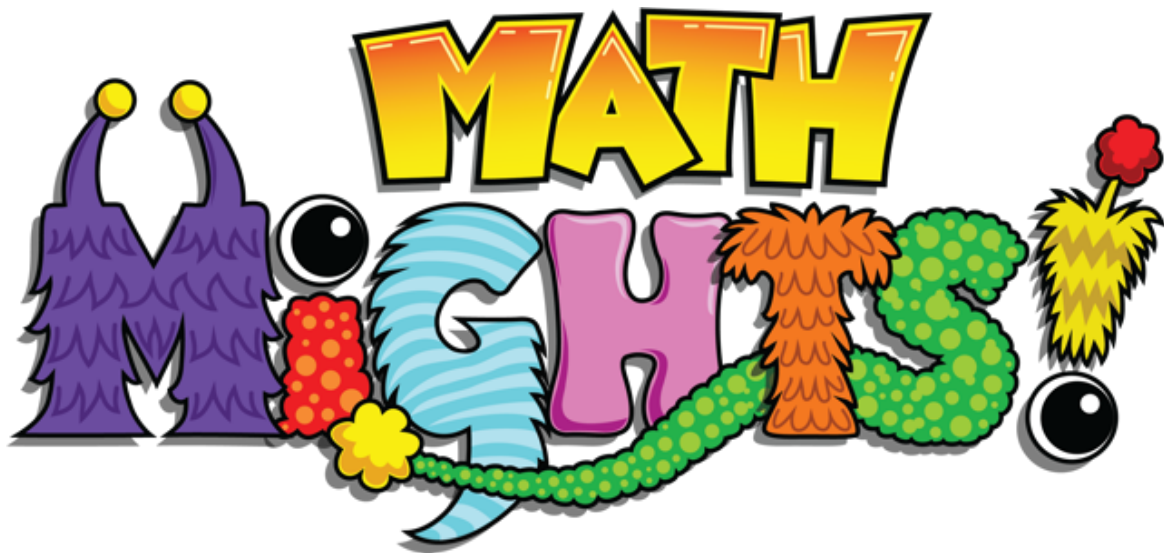


Number Line A				
$1\frac{1}{2}$	$2\frac{1}{2}$	$3\frac{1}{2}$	$4\frac{1}{2}$	$5\frac{1}{2}$
$6\frac{1}{2}$	$7\frac{1}{2}$	$8\frac{1}{2}$	$9\frac{1}{2}$	$10\frac{1}{2}$

Number Line B				
$1\frac{1}{4}$	$2\frac{1}{4}$	$3\frac{1}{4}$	$4\frac{1}{4}$	$5\frac{1}{4}$
$6\frac{1}{4}$	$7\frac{1}{4}$	$8\frac{1}{4}$	$9\frac{1}{4}$	$10\frac{1}{4}$
$11\frac{1}{4}$	$12\frac{1}{4}$			

For more resources, visit:

mathmights.org



Connect with Us

@mathmights

