


1

# Make a Ten

Episode #206



Extension Activities

For more resources, visit:

**SIS**  **TEACHERS**  
Strategic Intervention Solutions

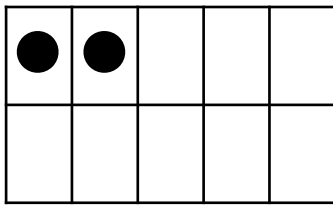

[mathmights.org](http://mathmights.org)



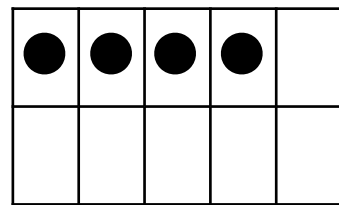
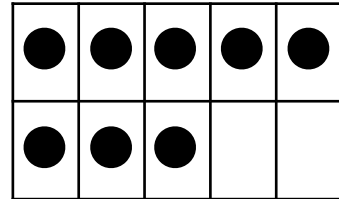


# Make a 10 With D.C.

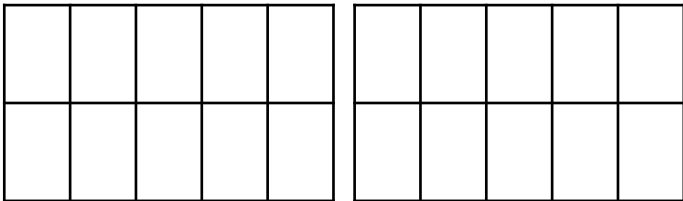
Directions: Use the ten frames to make 10. Solve the addition problem.



$$\underline{\quad} + \underline{\quad} = \underline{\quad}$$



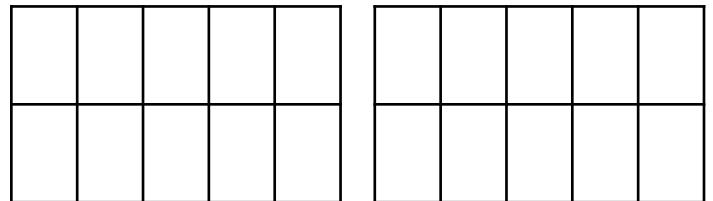
$$\underline{\quad} + \underline{\quad} = \underline{\quad}$$



$$7 + 5 = \square$$

○ ○

$$\underline{\quad} + \underline{\quad} = \underline{\quad}$$



$$9 + 8 = \square$$

○ ○

$$\underline{\quad} + \underline{\quad} = \underline{\quad}$$

For more resources, visit:

mathmights.org



Connect with Us

@mathmights

